














Trouve, dans chaque case, le nombre le plus grand.

9

8 400 – 8 356 – 8 405 	2 001 – 2 010 – 2 004 	5 209
		8 526
5 209 – 5 199 – 5 200 	8 405 – 8 510 – 8 327 	5 440
		8 405
2 009 – 2 010 – 2 018 	5 003 – 5 209 – 5 213 	2 403
		8 560
8 510 – 8 513 – 8 526 	2 020 – 2 018 – 2 019 	2 010
		5 425
5 128 – 5 425 – 5 213 	8 526 – 8 542 – 8 012 	8 569
		8 510
2 020 – 2 403 – 2 043 	5 428 – 5 439 – 5 440 	5 900
		2 020
8 560 – 8 126 – 8 542 	2 403 – 2 304 – 2 425 	5 806
		2 018
5 806 – 5 440 – 5 608 	8 560 – 8 569 – 8 509 	2 524
		8 542
2 405 – 2 524 – 2 425 	5 090 – 5 900 – 5 806 	2 425
		5 213

$5\ 209 - 5\ 199 - 5\ 200$	5 209	
$8\ 510 - 8\ 513 - 8\ 526$	8 526	
$5\ 428 - 5\ 439 - 5\ 440$	5 440	
$8\ 400 - 8\ 356 - 8\ 405$	8 405	
$2\ 020 - 2\ 403 - 2\ 043$	2 403	
$8\ 560 - 8\ 126 - 8\ 542$	8 560	
$2\ 001 - 2\ 010 - 2\ 004$	2 010	
$5\ 128 - 5\ 425 - 5\ 213$	5 425	
$8\ 560 - 8\ 569 - 8\ 509$	8 569	
$8\ 405 - 8\ 510 - 8\ 327$	8 510	
$5\ 090 - 5\ 900 - 5\ 806$	5 900	
$2\ 020 - 2\ 018 - 2\ 019$	2 020	
$5\ 806 - 5\ 440 - 5\ 608$	5 806	
$2\ 009 - 2\ 010 - 2\ 018$	2 018	
$2\ 405 - 2\ 524 - 2\ 425$	2 524	
$8\ 526 - 8\ 542 - 8\ 012$	8 542	
$2\ 403 - 2\ 304 - 2\ 425$	2 425	
$5\ 003 - 5\ 209 - 5\ 213$	5 213	